

कक्षा- 2

विषय :- हिन्दी

नाम :- \_\_\_\_\_

आज मौसम बढ़िया है। सौरभ की मौसी भी आयी है। वो खिलौने और मिठाई लाई। माँ ने कचौड़ी और गोभी के पकौड़े बनाये। सबने बड़े शौक से खाये। सब मिलकर चिड़ियाघर घूमने गए। रंग बिरंगे तोते पिंजरे में बैठे थे। मोर नाच रहा था। सफेद घोड़ा , मोटा शेर ,काला भालू, भूरा खरगोश और अनेक जानवर भी देखे। लौटते समय बाजार से खिलौने खरीदे।

प्र० 1. कहानी में से किन्ही पाँच ओ और औ मात्रा से शब्द ढूँढ कर लिखो -

\_\_\_\_\_ ओ \_\_\_\_\_  
\_\_\_\_\_  
\_\_\_\_\_  
\_\_\_\_\_  
\_\_\_\_\_

\_\_\_\_\_ औ \_\_\_\_\_  
\_\_\_\_\_  
\_\_\_\_\_  
\_\_\_\_\_  
\_\_\_\_\_

प्र० 2. सही वर्ण पर मात्रा लगाकर शब्द बनाओ।

म र \_\_\_\_\_

अ जा र \_\_\_\_\_

द इ ना \_\_\_\_\_

त इ ना \_\_\_\_\_

ज क र \_\_\_\_\_

स म वा र \_\_\_\_\_

प्र० 3. अर्थ लिखकर वाक्य बनाओ ।

मूर्ख \_\_\_\_\_

इंतजार \_\_\_\_\_

असमर्थ \_\_\_\_\_

तलाश \_\_\_\_\_


प्र० 4. वर्णों को जोड़कर शब्द बनायें ।



फ् + ऊ + ल = \_\_\_\_\_



म् + ओ + र = \_\_\_\_\_



त् + ओ + त् + आ = \_\_\_\_\_



ग्+आ +य् + अ = \_\_\_\_\_

प्र० 5. संयुक्त व्यंजन वाले दो - दो शब्द लिखो ।

क) क्ख \_\_\_\_\_

ख) स्व \_\_\_\_\_

ग) स्त \_\_\_\_\_

घ) त्त \_\_\_\_\_

ङ) च्च \_\_\_\_\_

प्र० 6. बिंदु और चंद्र बिंदु से पांच पांच शब्द लिखे ।

\_\_\_\_\_

\_\_\_\_\_

\_\_\_\_\_

\_\_\_\_\_

\_\_\_\_\_

\_\_\_\_\_


\_\_\_\_\_

\_\_\_\_\_

\_\_\_\_\_

\_\_\_\_\_

प्र० 7. चित्रों को देख कर नाम लिखो ।



\_\_\_\_\_



\_\_\_\_\_



\_\_\_\_\_



\_\_\_\_\_

प्र० 8. दिए गए पशु-पक्षियों को पहचान कर उनकी बोलियों के साथ मिलान करें ।

क)



चहचहाना

ख)



चिंघाड़ना

ग)



टँ - टँ

घ)



दहाड़ना

प्र० 9. अनेक शब्दों के लिए एक शब्द लिखें ।

क) जो कपड़े धोता है \_\_\_\_\_

ख) जो बगीचे में काम करता है \_\_\_\_\_

ग) जो मिठाईयाँ बनाता है \_\_\_\_\_

प्र० 10. शेर का चित्र बनाकर पांच पंक्तियाँ लिखो ।


---

---

---

---

---



## HomeWork Assignment

Class : Std II

GURU GOBIND SINGH PUBLIC SCHOOL, DHANBAD

WORKSHEET (2020-21)

Sub:- ENGLISH

Std:-II

Name: \_\_\_\_\_

Sec. \_\_\_\_\_

1) Read the passage and then answer the questions given below: -

Arti is Neha's best friend. She is getting ready to Neha's birthday party in the evening. She bought big Teddy Bear as a birthday gift for Neha. Arti wants to wrap it in red colour paper. She knows that red is Neha's favourite colour. She can't find any red paper. Arti is sad. Looking at Arti's sad face her mother told her to wrap the gift in her red scarf. Arti was delighted.

a) Who was Neha's best friend?

\_\_\_\_\_

b) Where is Arti going in the evening?

\_\_\_\_\_

c) Which is Neha's favourite colour?

\_\_\_\_\_

d) What did Arti buy as a birthday gift for Neha?

---

e) Write True or False of the following: -

i) Arti is getting ready to go to Zoo. \_\_\_\_\_

ii) Arti wants to wrap it in the red colour paper. \_\_\_\_\_

iii) She bought small Teddy Bear as a birthday gift. \_\_\_\_\_

iv) Arti is Neha's best friend. \_\_\_\_\_

f) Pick out any four Nouns from the passage:-

i)	ii)
iii)	iv)

g) Write the opposites of the following from the passage:-

i) Morning \_\_\_\_\_

ii) Small \_\_\_\_\_

iii) Happy \_\_\_\_\_

iv) Worst \_\_\_\_\_

2) Change these nouns to their singular or plural forms:-

a) bus \_\_\_\_\_

b) glasses \_\_\_\_\_

c) chair \_\_\_\_\_

d) tomato \_\_\_\_\_

e) kite \_\_\_\_\_

f) flower \_\_\_\_\_

3) Colour the boxes which have proper nouns:-

April	MS Dhoni	class	Ganga
bird	India	Monday	food
zoo	table	tree	Dhanbad

4) Circle the best describing word in the following sentences:-

a) The fox is a ( cunning / tiny ) animal.

b) A ( fat / hot ) cup of tea.

c) The house is ( big / sour ).

d) The sun is ( round / square ) in shape.

e) Rita is wearing a ( cold / beautiful ) dress.

5) Choose the correct pronoun from the box and fill in the blanks: -

He

She

they

it

You

a) \_\_\_\_\_ has a black long hair.

b) Riya and Priya are friends. \_\_\_\_\_ go to school together.

c) \_\_\_\_\_ are my best friend.

d) Mr. Samir is a doctor. \_\_\_\_\_ works in a hospital.

e) \_\_\_\_\_ is a beautiful lamp.

6) Rewrite these sentences using 'capital letters', Question mark and full stop .  
in the correct places: -

a) new delhi is the capital of india

---

b) what is your name

---

\_\_\_\_\_ c) it is very  
hot in may and june

---

d) where do you stay



---

7) Put 'a' 'an' or 'the' in the following blanks:-

a) \_\_\_\_\_ oak tree

b) \_\_\_\_\_ sun shines

c) \_\_\_\_\_ red apple

d) \_\_\_\_\_ small book

e) \_\_\_\_\_ honest boy

f) \_\_\_\_\_ star twinkles

8) Answer the following questions:-

a) Why is Shanu puzzled?

---

---

b) How do you think this makes Shanu feel?

---

---

c) What could Grandpa and Amir do to save the garden?

---

---


d) Why was Hyena sad?


---


---

e) How did monkey find Hyena's laugh?

9) Complete these sentences with this, that, those, these with the help of the pictures:-

a)  \_\_\_\_\_ is a delicious cake.

b)  \_\_\_\_\_ flowers are in the pot.

c) \_\_\_\_\_ is a small balloon. 



d) \_\_\_\_\_ birds are flying in the sky.

10) Look at the picture and write five lines about it:-



i. \_\_\_\_\_

ii. \_\_\_\_\_

iii. \_\_\_\_\_

iv. \_\_\_\_\_

v. \_\_\_\_\_

**NOTE :- Do the below activities in the SCRAP BOOK**

Topic - NOUN

- i) Paste the pictures of 5 common noun and 5 proper noun & label it.
  - ii) Draw and colour your favourite game and write five lines about it.
- 

**GURU GOBIND SINGH PUBLIC SCHOL , DHANBAD**

**SESSION – 2020-2021 SUB- EVS (WORKSHEET)**

**STD – 2**

**NAME - ----- ROLL.NO. - ----- SEC- -----**

---


Q.1. Give one word answer.

- a) My father's father is my -----.
- b) My father's mother is my -----.
- c) My father's brother is my -----.
- d) My uncle's wife is my -----.
- e) My uncle's son is my -----.

Q.2. Match the following.

- |         |                     |
|---------|---------------------|
| Lungs   | digests food        |
| Brain   | pumps blood         |
| Muscles | helps us to think   |
| Stomach | help in movement    |
| Heart   | help us to breathe. |

Q.3. Look at the pictures of parts of the body and name them using the words given in the box.



Q.4. Write the name of the four internal parts of the body, which we cannot see.

-----

-----

Q.5. Fill in the blanks with the given words.

( boil, unhealthy, strong, clean)

- a) Oily food is -----
- b) Keep your hair ----- and tidy.
- c) Food helps us to grow ----- and healthy.
- d) We should ----- water before drinking.

Q.6. Write T for true and F for false.

- a) Animal do not grow. -----
- b) A new born child is called a youth. -----
- c) Seeds grow into a sapling. -----
- d) A child grows into a infant. -----

Q.7. Circle the correct answer.

- a) All living / non-living things grow.
- b) A young person becomes old / infant.
- c) A child can / cannot walk.

Q.8. The picture below shows a hawker selling food. Why should we not eat hawker's food? Write in the space given below.



-----  
-----  
-----Q.9. Write the time at which you do the following activities.

- a) Get up = -----
- b) Sleep = -----
- c) Have breakfast = -----
- d) Eat dinner = -----

Q.10. Answer the following questions.

a) Define sibling?

Ans - -----  
-----

b) What is a joint family?

Ans - -----  
-----

c) What are internal parts of the body?

Ans - -----  
-----

d) What is growth?

Ans - -----  
-----

e) Define infant?

Ans - -----  
-----

f) Write any two healthy habits.

Ans - -----  
-----

Q.11. Draw the picture of one living and one non-living thing and label it.

--	--

NOTE - PROJECT WORK

DO IN SCRAP BOOK.

1. Draw or paste the picture of sense organs which we have and also write their functions.
  2. Draw or paste the different stages of human life cycle and label it.
- 

**WORKSHEET – 1**

**STD. – II**

**SUB :- MATHEMATICS**

**NAME :- \_\_\_\_\_ SEC. :- \_\_\_\_\_ ROLL NO. :- \_\_\_\_\_**

1) Write the number which comes after the given number.

351 \_\_\_\_\_

482 \_\_\_\_\_

226 \_\_\_\_\_

112 \_\_\_\_\_

2) Write the number which comes before the given number.

\_\_\_\_\_ 745

\_\_\_\_\_ 576

\_\_\_\_\_ 896

\_\_\_\_\_ 692

3) Put the symbols  $>$ ,  $<$  or  $=$  correctly

58  68

77  77

302  526

436  855

4) Complete the missing number

605 \_\_\_\_\_

609 610

611 \_\_\_\_\_

615

5) Fill in the blanks :-

a) Largest three digit number is \_\_\_\_\_

b) Smallest three digit number is \_\_\_\_\_

c) Number comes in between 42 and 44 is \_\_\_\_\_

d) 32 is an \_\_\_\_\_ (even/odd) number.

e) The next odd after 67 is \_\_\_\_\_.

6) Arrange the following numbers in ascending order

a) 252                      525                      336                      112

\_\_\_\_\_

b) 425                      728                      283                      641

\_\_\_\_\_

7) Write the number names

a) 464 \_\_\_\_\_



- b) 512 \_\_\_\_\_  
c) 992 \_\_\_\_\_  
d) 326 \_\_\_\_\_

8) Write the given numbers in expanded form :-

a) 476 =  +  +

b) 942 =  +  +

c) 634 =  +  +

d) 208 =  +  +

9) See the sign (+, -) and solve.

a)  $67 + 20 =$

c)  $92 - 12 =$

b)  $8 + 11 =$

d)  $85 - 13 =$

10) Write the ordinal numbers in words :-

1<sup>st</sup> \_\_\_\_\_

6<sup>th</sup> \_\_\_\_\_

2<sup>nd</sup> \_\_\_\_\_

7<sup>th</sup> \_\_\_\_\_

3<sup>rd</sup> \_\_\_\_\_

8<sup>th</sup> \_\_\_\_\_

4<sup>th</sup> \_\_\_\_\_

9<sup>th</sup> \_\_\_\_\_

5<sup>th</sup> \_\_\_\_\_

10<sup>th</sup> \_\_\_\_\_

11) Write the even numbers between 100 to 120

100 \_\_\_\_\_ 110

12) In the word NUMBERS (Write ordinal number)

- a) The letter M is at \_\_\_\_\_ position.
- b) The letter B is at \_\_\_\_\_ position.
- c) The letter R is at \_\_\_\_\_ position.

13) Add the followings :-

a)  $434 + 362$

	H	T	O
+			

b)  $250 + 110 + 230$

	H	T	O
+			

c)  $58 + 69$

	T	O
+		

d)  $43 + 95$

	T	O
+		

14) Subtract the followings :-

a)  $689 - 17$

	H	T	O
-			

b)  $752 - 36$

	H	T	O
-			

15) Word problems :-

- a) There are 110 blue fish and 112 golden fish in a pond. How many fish are there in all ?

	H	T	O
Blue fish			
Golden fish	+		
Total fish			

b) An exercise book had 160 pages. 142 pages have been used. How many pages are unused ?

	H	T	O
-			

**PROJECT WORK**

Do in scrap book :-

1. There are eight planets in our solar system. You have to write the correct ordinal number to describe the position of each planet from the sun.
  2. Show Addition and Subtraction with the help of colourful bindis.
- 

**GURU GOBIND SINGH PUBLIC SCHOOL, DHANBAD**  
**WORKSHEET-1 (Session- 2020-21)**

**Std-II**

**Sub:-COMPUTER**

Date:- \_\_\_\_\_

Name \_\_\_\_\_ Sec \_\_\_\_\_ Roll No. \_\_\_\_\_

**Q.1. Unscramble the letters to write the correct words:-**

- |                 |                  |
|-----------------|------------------|
| a) YOEMMR _____ | b) OMUSE _____   |
| c) PINUT _____  | d) EIEDVC _____  |
| e) UPOTTU _____ | f) RAGEOST _____ |

**Q.2. Name the following:-**

- a) Two input devices \_\_\_\_\_ , \_\_\_\_\_
- b) Two man-made things \_\_\_\_\_ , \_\_\_\_\_
- c) Two types of computer \_\_\_\_\_ , \_\_\_\_\_

d) Two cartoon movies \_\_\_\_\_ , \_\_\_\_\_

**Q.3 .Tick (✓) the correct option:-**

a) We use a computer at home to

(i) pray  (ii) do homework

b) The computer is a/an

(i) electronic device  (ii) optical device

c) Pen drive is a

(i) processing device  (ii) storage device

d) Calculations by a computer are always

(i) correct  (ii) incorrect

e) Doctors use computers in hospitals to

(i) treat patients  (ii) make films

**Q.4. Match the following:-**

- |                       |                          |
|-----------------------|--------------------------|
| 1. Data               | a.bank                   |
| 2. Money transactions | b. UPS                   |
| 3. Safe power supply  | c. facts/figures         |
| 4. Storage            | d. error-free operations |
| 5. Accuracy           | e. very large memory     |

**Q.5. Fill in the blanks ,choosing suitable words from the bracket:-**

mistake , CPU ,student , Versatility , teach , output

- a) The printer is an ..... device.
- b) Processing cannot be done without a .....
- c) A computer never makes a .....

d) ..... of a computer allows its extensive use in every field.

e) Computers are used in school to .....

f) Computers keep ..... records at school.

**Q.6. Tell me who am I ?**

a) I need instructions to do some task \_\_\_\_\_

b) I can take decision of my own \_\_\_\_\_

c) I help you in typing a letter \_\_\_\_\_

**Q.7. What do the following short forms stand for ?**

a) CD \_\_\_\_\_

b) DVD \_\_\_\_\_

c) CVT \_\_\_\_\_

d) CPU \_\_\_\_\_

**Q.8. Identify and write the name of the type of the computer:-**


a.



b.



c.



d.



**Q.9. Write (T) for true and (F) for false in the given sentences:-**

a) Keyboard is an output device.

b) A computer is different from a man.

c) You cannot withdraw money from an ATM at night.

d) A computer can do a variety of tasks.

e) Teachers do not use computers.

**Q.10. Answer the following questions:-**

a) What do you understand by input?

Ans: \_\_\_\_\_

\_\_\_\_\_  
\_\_\_\_\_

b) Write any two uses of a computer.

(i) at home

\_\_\_\_\_  
\_\_\_\_\_

—

(ii) in school

\_\_\_\_\_  
\_\_\_\_\_

—

c) Write any three differences between a computer and a human beings.

<u>Human beings</u>	<u>Computer</u>

--	--

**Q.11 Complete the missing letters:-**

- a) P r \_ n t \_ r
- b) C o \_ p u t \_ r
- c) H a \_ d d \_ s k
- d) A i \_ p o \_ t
- e) P r o c \_ s s \_ n g

**Q.12. Draw any three storage devices and also write their name:-**

--	--	--

**Q.13. PROJECT WORK :-**

**Note- Do in scrap book**

- a) Paste the pictures of any three input and output devices and also write their name.
  - b) Paste five pictures of places where you have seen the computer and name them.
  - c) Write any three advantages and disadvantages of a computer.
-

