

HomeWork Assignment

Class : III

Subject : EVS

Chapter-1 Meet My Family

- (1).What is a family? Write any two types of Family.
- (2).How is your mother related to your paternal grandparents?
- (3).How do you help each other in your family
- (4).Who are identical twins?
- (5).What are hereditary features?
- (6).What is your relation in following cases:----
 - {a}.Your father's parents --- _____
 - {b}. Your mother's parents --- _____
 - {c}. Your father's brother --- _____
 - {d}. Your mother's sister --- _____
 - {e}. Your uncle and aunt child --- _____

Chapter-2 caring for the physically challenges and Elderly

- (1).Give one word for the following:----
 - (a).Some who examines people's eye and sells glasses and contact lenses . _____
 - (b). People who can't see. _____
 - (c). People who can't hear. _____
 - (d). People who can't speak. _____
 - (e). Special system to read and write that is used by blind people. _____
- (2). How can we take care of physically challenged people?
- (3).Who are called deaf?
- (4).Who are called dumb?
- (5). How can we take care of elderly people?

Chapter-3 Food we Eat

- (1).Give two examples of each:-----
 - (a). Energy giving Food. _____ , _____
 - (b). Body Building Food. _____ , _____
 - (c). Protective Food. _____ , _____
 - (d). Source of Food. _____ , _____
 - (e).Junk Food. _____ , _____
- (2). Give reason for the following:-----
 - (a).We should drink plenty of water.
 - (b)We should not eat junk food.
- (3).Why do we need food?
- (4). What are protective food?
- (5).Who are Vegans?
- (6). Write the different methods of cooking food.
- (7).Draw or Paste a picture and write the name of :-----
 - (a).A protective food. (b).An energy giving Food.
 - (c).A body building food. (d).A food that can be eaten raws.

Chapter-4 Water we Drink

- (1).Give examples of the following :-----
 - (a).Three States of water. _____ , _____ , _____

- (b). Three sources of water. _____, _____, _____
- (2). Write any four activities for each water is being used?
- (3). What is Evaporation?
- (4). What makes water unfit for drinking?
- (5). Write three ways to save water?
- (6). What is the main source of water.

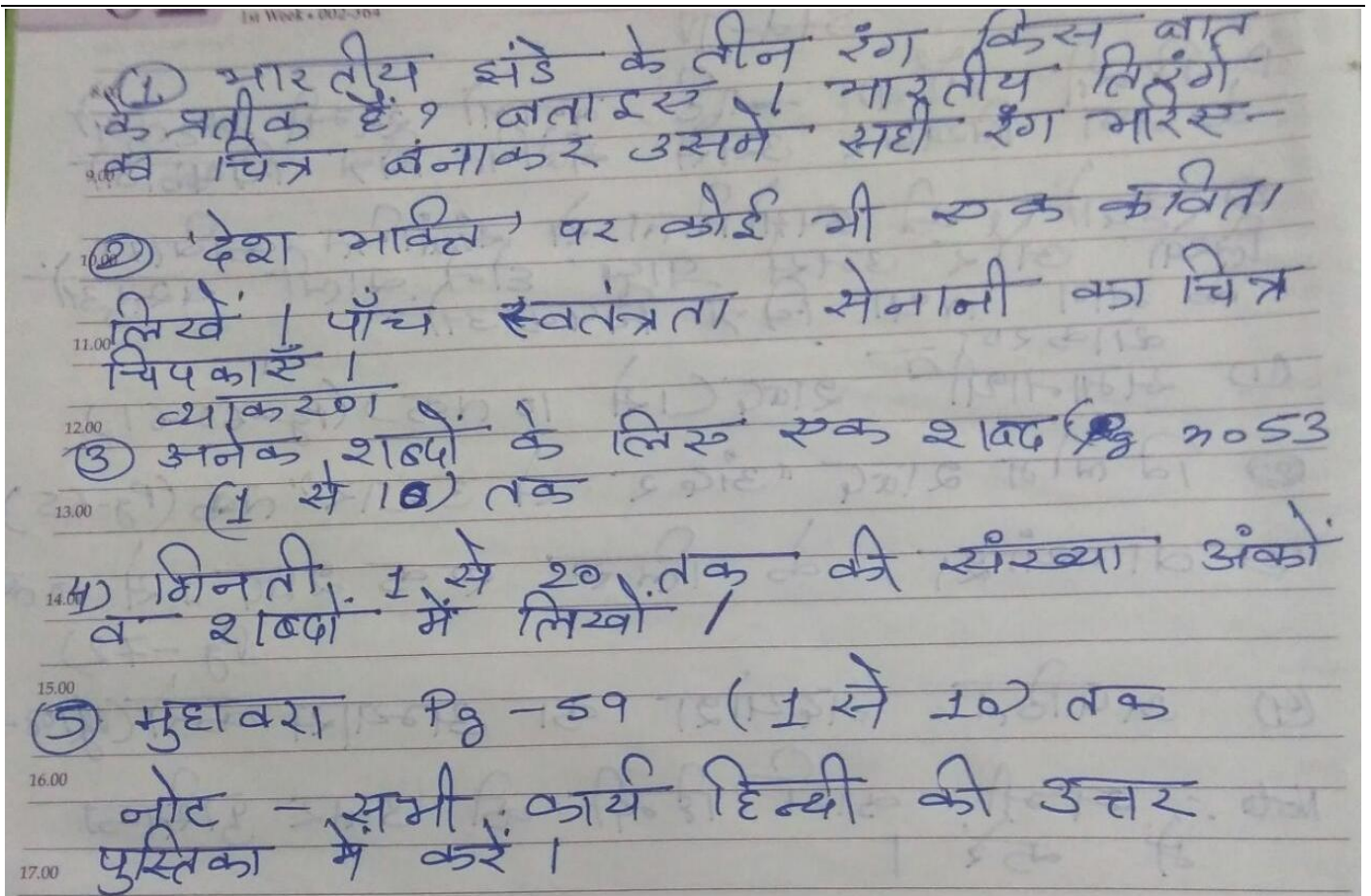
Note:- Scrap Book Activity

- (1). Draw the family tree and write the name of your family members.
- (2). Draw the different cooking utensils that are used for cooking food and write the name.
- (3). Draw, colour and write a slogan on saving water.

Subject : Computer

1. Read Chapter 1, 2, 3
2. Learn objectives of Chapter 1, 2, 3
3. Learn Question Answers of Chapter 1, 2, 3
4. Draw two Input, Output devices and CPU(processing device)

Subject : Hindi



Subject : Mathematics

A. Write the number names for the following:

[a] 1236 =

[b] 4632 =

[c] 9058 =

[d] 6468 =

B. Write the numerals for the following:

[a] Nine thousand two hundred =

[b] Seven thousand one hundred seventeen =

[c] Six thousand two hundred fifty-seven =

[e] Eight thousand eighty-two =

C Write the place value of the digits in red :

[a] 6 1 **2** 3 =

[b] 4 1 6 **3** =

[c] 8 **9** 7 4 =

[d] 3 0 **8** 9 =

D. Complete the table :

Predecessor [- 1]	Number	Successor [+ 1]
[a]	3462
[b]	7999
[c]	4789
[d]	6240
[e]	1492

E. Compare and fill in the boxes with > , < or =.

[a] 859 2324

[b] 376 3246

[c] 3210 3210

[d] 1967 1902

[e] 2073 2429

[f] 6805 6589

F. Arrange the following in ascending order. One has been done for you.

[a] 5237 , 6729 , 4320 , 7922 = **4320 , 5237 , 6729 , 7922**

[b] 7321 , 2462 , 5298 , 4326 =

[c] 1234 , 742 , 2895 , 1021 =

[d] 4357 , 7325 , 5243 , 9274 =

[e] 2469 , 8724 , 4399 , 8714 =

G. Arrange the following in descending order. One has been done for you.

[a] 7399 , 7924 , 7618 , 8494 = **8494 , 7924 , 7618 , 7399**

[b] 9328 , 842 , 8108 , 8828 =

[c] 6178 , 6818 , 108 , 6128 =

[d] 8745 , 8100 , 8270 , 5321 =

[e] 2346 , 4269 , 5269 , 4239

H. Write the greatest and the smallest number with the given digits, using each only once :

Greatest Number

Smallest Number

[a] 3 , 2 , 0 , 1 =**3210**.....

.....**1023**.....

[b] 5 , 7 , 9 , 8 =

.....

[c] 0 , 4 , 7 , 6 =

.....

[d] 5 , 2 , 0 , 9 =

.....

[e] 8 , 6 , 4 , 7 =

.....

I. Round off the following numbers to the nearest 10.

[a] 24 = [b] 37 = [c] 126 = [d] 312 =

[e] 1583 = [f] 4928 = [g] 3703 = [h] 5406 = **5410**.

J. Round off the following numbers to the nearest 100.

[a] 111 = [b] 229 = [c] 456 = [d] 749 =

[e] 1254 = [f] 3717 = [g] 8115 = [h] 9329 = **9300**

K. Write the Hindu-Arabic numerals for the following :

[a] IX = [b] XX = [c] XXV = [d] XII =

[e] XXXI = [f] XV = [g] XXXVI = [h] XIX =

L. Write the Roman numerals for the following :

- [a] 7 = [b] 13 = [c] 28 = [d] 30 =
[e] 25 = [f] 39 = [g] 19 = [21 =
- -----

ASSIGNMENT

[MAY 2020]

A. Add the following :

- | | | | | | |
|-----|-----------|-----|-----------|-----|-----------|
| [a] | Th H T O | [b] | Th H T O | [c] | Th H T O |
| | 3 2 7 6 | | 4 2 5 4 | | 2 4 1 9 |
| | + 1 3 2 3 | | + 2 6 1 0 | | + 4 3 6 0 |
| | _____ | | _____ | | _____ |
| | _____ | | _____ | | _____ |

B. Write in columns and add :

- [a] 4213 + 3474 [b] 6223 + 2645 [c] 1521 + 2340 + 5134

C. Fill in the blanks :

- [a] 19 + 25 = 25 +
- [b] 197 + 0 =
- [c] 343 + = 256 + 343
- [d] 4272 + = 4273
- [e] (523 + 172) + 609 = 523 + (..... + 609)

D. Solve the following :

- [1] In a school, there are 1205 boys and 1312 girls. Find the total number of students in the school.
- [2] Mr Shah bought 2936 pencils, 2368 erasers and 3000 notebooks for his shop. Calculate the total quantity of stationery that he bought.
- [3] Ruchi distributed 257 toffees on Diwali and 320 toffees on Christmas

Day. How many toffees did she distribute in all ?

- [4] On Monday, 2514 men, 1448 women and 1595 children visited the India Gate. How many people visited the India Gate altogether ?
-
-

ASSIGNMENT

[JUNE 2020]

A. Subtract the following :

[a] Th H T O [b] Th H T O [c] Th H T O

8 5 2 1

9 3 8 2

7 4 9 8

— 4 3 2 0

— 5 2 4 1

— 4 4 7 2

B. Write the following in figures and then subtract :

[1] Five thousand two hundred one from nine thousand six hundred seven.

[2] Four thousand four hundred sixteen from eight thousand five hundred twenty-seven.

[3] Two thousand seventeen from six thousand five hundred twenty-nine.

C. Solve the following :

[1] A school coat costs Rs. 870. If you give Rs. 1000 note to the shopkeeper, how much money will you get back ?

[2] In a sanctuary, there are 9483 animals. 1693 animals were transferred to another sanctuary. How many animals are left in the first sanctuary ?

D. Solve :

[a] $2345 + 1203 - 617$

[b] $4825 - 1673 + 505$

[c] $5014 - 2000 + 66$

[d] $7766 - 5522 + 1133$

E. Put the correct mathematical symbols in the boxes to make the sum correct :

[a] $327 \dots 227 \dots 650 = 750$

[b] 816 900 1176 = 540

GURU GOBIND SINGH PUBLIC SCHOOL, DHANBAD

SESSION 2020-21

WORKSHEET – 1

STD. – III

SUB :- ENGLISH

1. Read the passage carefully :-

Once there was a boy called Saurav. His teachers were very fond of him because he was a good student. He never make any mistake. But his mother would always tell him to be more careful.

It was his Mathematics test. When he saw the sums in the paper, he was overjoyed. He said loudly, 'Ma'am the test is very easy.' 'Nikhil', his friend was quite as he did not find the test to be that simple.

Saurav was the first one to finish the test. The teacher too checked eagerly. But, what happened ? One sum after another all went wrong and he got zero out of twenty. He had forgotten to borrow and then subtract. But Nikhil got full marks. He did his work carefully. The teacher called Saurav and said, Don't be over-confident, revise your work carefully. Saurav promised to be careful in future.

Now answer the following questions :-

a) Why were teacher fond of Saurav ?

b) What was the name of Saurav's friend ?

c) Who got full marks Saurav or Nikhil ?

d) Write the opposite of the words given below from the above passage :-

(i) careless - _____

(ii) right - _____

(iii) hard - _____

(iv) start - _____

e) Pick out two common nouns and two proper nouns from the above passage:-

Common noun - _____

Proper noun - _____

2. Read each word in the box. Write it where it belongs on the chart :-

Doctor	patric	school	Goa	chair	Alto car
--------	--------	--------	-----	-------	----------

	Common noun	Proper noun
Person		
Place		
Thing		

3. Fill in the blanks with correct collective nouns from the word bank :-

i) My dog has a new _____ of puppies.

ii) There is a _____ of fruits on the table.

iii) The _____ of students were working.

iv) The _____ of soldiers marched in line.

v) The _____ of crayons are kept on the shelf.

class, box, basket, army, litter

4. Circle the abstract noun in these sentences :-

i) The young girl had a childhood that was full of love and happiness.

ii) Climbing that mountain took bravery.

iii) The dove is a symbol of peace.

iv) My grandmother is filled with wisdom.

v) Ila shares lots of love with his family.

5. Choose (a / an / the) correct articles from the option given below :-

i) Put (a / the) plate on (the / an) table.

ii) There is (a / an) apple in (a / the) fridge.

iii) I eat pie with (a / the) spoon.

iv) (The / A) rocking chair is comfortable.

v) Read me (the / a) story.

6. Tick the uncountable noun and circle the countable noun :-

drink	orange	advice	
rain	fruit	hair	classroom
watermelon	soup	time	
shopping	table	homework	

7. Make sentences with the words given below :-

- (i) Island
- (ii) Survive
- (iii) Bathtub
- (iv) Secret
- (v) Proud
- (vi) Tiffin box
- (vii) Whistle
- (viii) Shouting
- (ix) Train
- (v) Angry

8. See the picture and write five sentences about it :-



9. Answer the following questions :-

(i) Why did Noi put the whale in the cart ?

(ii) Why do you think Noi and his father took the baby whale back to the sea? Would the baby whale have liked it more if it had stayed back with Noi ?

(iii) Why was Kaku sad ?


(iv) Why do you think Kaku's mother had tears in her eyes ?

(v) Are giraffes gentle and kind animals ? Which line in the poem makes you think so ?

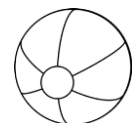
10. Use a word from the word box below to make a compound word. Use the pictures as clue :-

ball	flake	fly	fish	book	cup	cage
------	-------	-----	------	------	-----	------

i) Gold + _____ = _____



ii) Base + _____ = _____



iii) Butter + _____ = _____



iv) Note + _____ = _____



v) Bird + _____ = _____



vi) Snow + _____ = _____



vii) Tea + _____ = _____



11. Complete these sentences with much, many, some or any :-

- i) She has got _____ friends.
- ii) How _____ money do you have ?
- iii) Is there _____ wine ?
- iv) I drink _____ water at each meal.

12. Write a paragraph on 'My favourite animal' in about 100 words.
